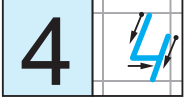



Урок 18


1 2 3 4 чатыры 




1.




2.



3.



? ? ?



? ? ?



? ? ?

4.



? ? ? = ?



? ? ? = ?



? ? ? = ?

5.




$$\begin{array}{r} 1 + 1 \\ 2 - 1 \end{array}$$

$$\begin{array}{r} 2 + 1 \\ 3 - 1 \end{array}$$

$$\begin{array}{r} 3 + 1 \\ 4 - 1 \end{array}$$


6.



$$3 + 1$$



$$4 - 1$$



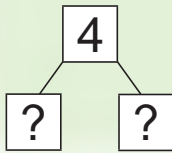
Чатыры — гэта:

 **тры і адзін** $4 = 3 + 1$

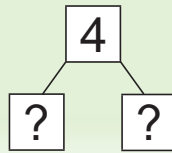
 **два і два** $4 = 2 + 2$

 **адзін і тры** $4 = 1 + 3$

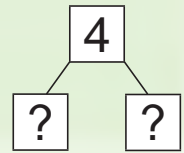
1.



$$4 = \square + \square$$

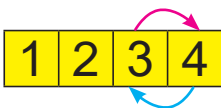


$$4 = \square + \square$$



$$4 = \square + \square$$

2.



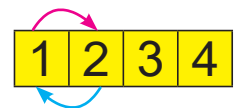
$$3 + \square$$

$$4 - \square$$



$$\square + 1$$

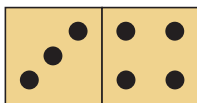
$$\square - 1$$



$$1 + \square$$

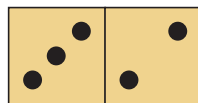
$$\square - 1$$

3.



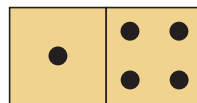
$$3 \text{ ? } 4$$

$$4 \text{ ? } 3$$



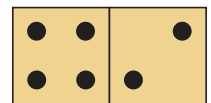
$$3 \text{ ? } 2$$

$$2 \text{ ? } 3$$



$$1 \text{ ? } 4$$

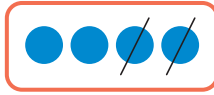
$$4 \text{ ? } 1$$



$$4 \text{ ? } 2$$

$$2 \text{ ? } 4$$

4.



5. Колькі? На колькі больш?

	Сінія	Не сінія
Вялікія		
Не вялікія		

6.






2 рублі



4 рублі



3 рублі



$$4 = ? ? ?$$

