

Урок 23



$$3 + 1 = 4$$

+ 1



Павялічыць
на адзін.



$$4 - 1 = 3$$

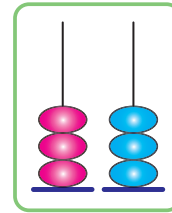
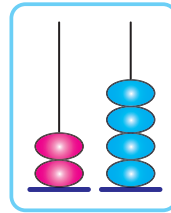
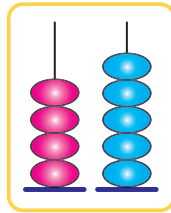
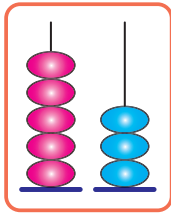
- 1



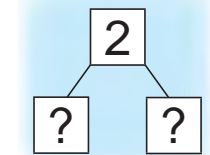
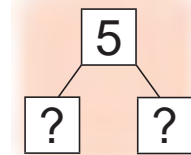
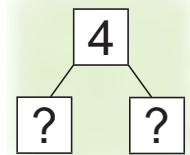
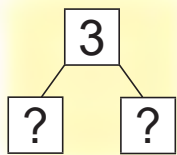
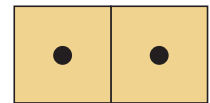
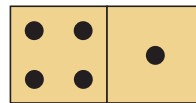
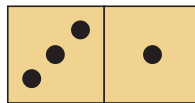
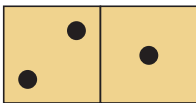
Паменшыць
на адзін.

1. $1 + 1$ $2 + 1$ $3 + 1$ $4 + 1$
 $2 - 1$ $3 - 1$ $4 - 1$ $5 - 1$

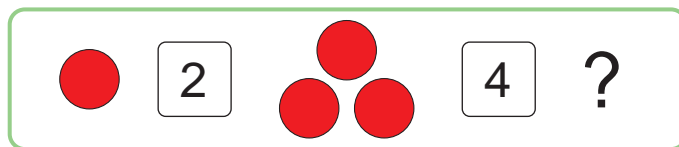
2. \geq



3.




4.



5.



? ? ? ? ?



? ? ? ? ?

6. Дапамажы Алесю і Яне скласці іншыя фігуры.



| | | |
|--------|--|--|
| Узялі | | |
| Склалі | | |

? Павяліч на 1 лікі: 4, 2.

Паменшы на 1 лікі: 5, 3.



Якія лікі схаваны за ?

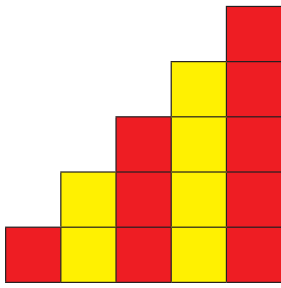
$$3 + \text{flower} = 4$$

$$\text{flower} + 1 = 5$$

$$3 - \text{flower} = 2$$

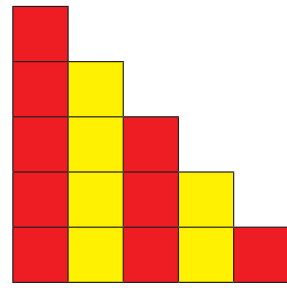
$$\text{flower} - 1 = 1$$

Урок 24



1 2 3 4 5

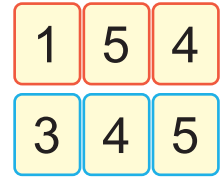
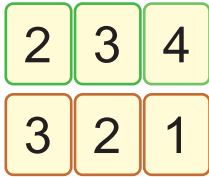
У парадку павелічэння.



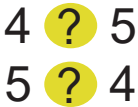
5 4 3 2 1

У парадку памяншэння.


1.



2.



3.



4. Разгадай слова.



5.



Кількі  ?

Кількі  ?

6. У Вані   . У Славы  .



7.

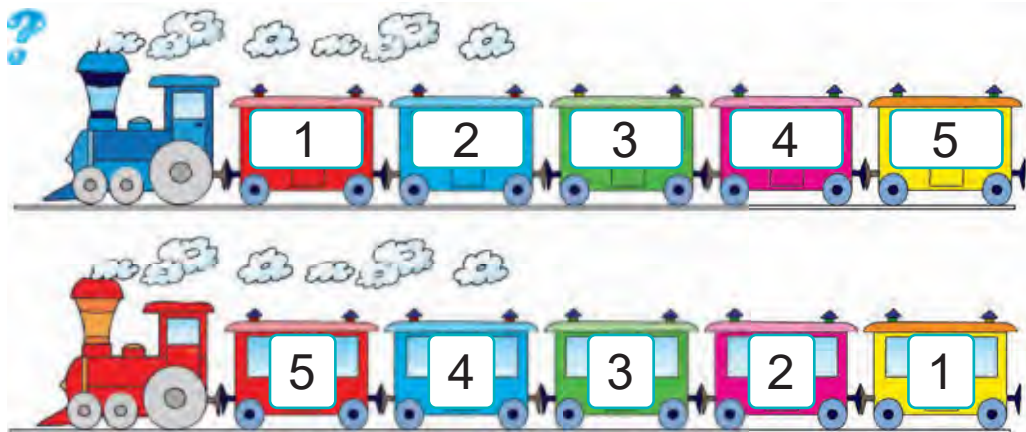


$2 + 3$

$3 + 1$

$3 + 2$

$2 + 2$



Урок 25

1. 4 паменшылі на 1.



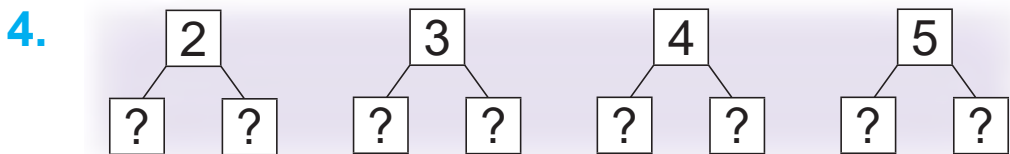
4 павялічылі на 1.



2. Колькі пялёсткаў? Назаві лікі ў парадку павелічэння.



3. $2 + 1$ $1 + 1$ $3 + 1$
 $5 - 1$ $3 - 1$ $2 - 1$



6. Было . Паляцеў .



7. Было . Прыехала .

$$2 + 1$$

$$2 + 2$$



$$4 - 1$$

$$4 - 2$$

8. Знайдзі пяць адрозненняў.



9.



$$5 ? 1$$

$$3 ? 5$$

$$4 ? 2$$