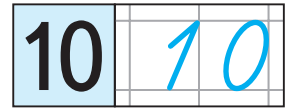




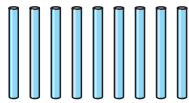
Урок 51

Двухзначныя лікі да 20



дзесяць

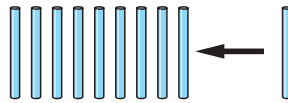
Што было?



9

палачак

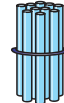
Што змянілася?



дадалі

1 палачку

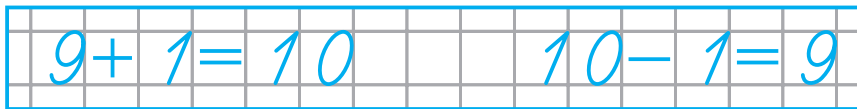
Што стала?




10 палачак,

або

дзесятак палачак



1.



$9 + ? = 10$

$8 + ? = 10$

$? + ? = ?$

$? + ? = ?$

$? + ? = ?$

$? + ? = ?$

$? + ? = ?$

$? + ? = ?$

$? + ? = ?$

2.

$9 ? 10$

$10 ? 1 + 0$

$7 + 1 ? 10 - 1$



$3 ? 10$

$9 + 1 ? 10$

$8 + 1 ? 8 - 1$

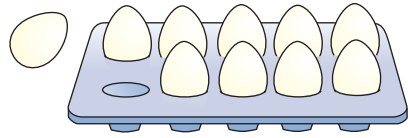
$10 ? 9$

$9 ? 10 + 0$

$10 - 0 ? 9 + 0$

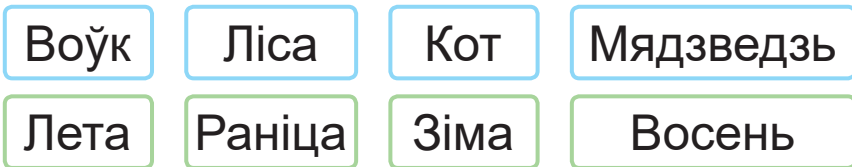


3. Купілі дзясятак яек.
Узялі адно яйка.
Колькі яек засталася?

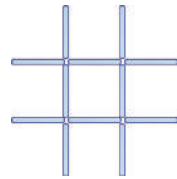


4. Які лік ва ўмове лішні?
Было 9 🍊. Валя ўзяла 4 🍊, а Вова ўзяў
столькі ж. Колькі 🍊 узялі дзеці?

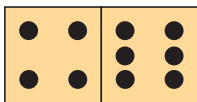
5. Знайдзі лішняе слова.



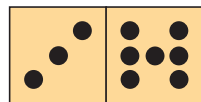
6. Як перакласці 3 палачкі так,
каб атрымалася 3 квадраты?



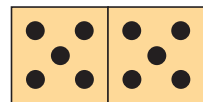
$4 + 6 = ?$



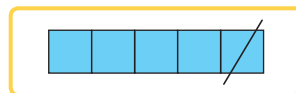
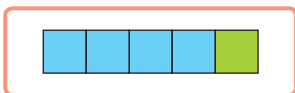
$3 + 7 = ?$



$5 + 5 = ?$



Выберы схему. Рашы задачу.



У машыны 4 🚗 і 1 запасное 🚗.
Колькі ўсяго 🚗 у машыны?